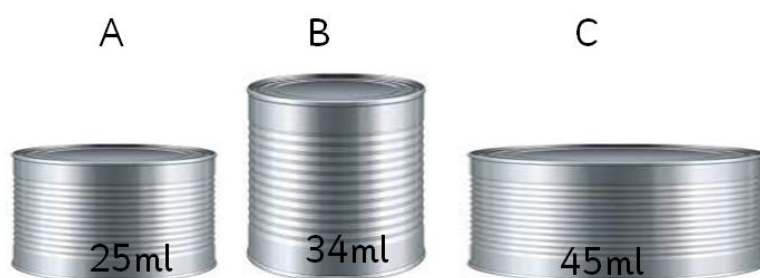


Unit 12: Lesson 4

Name _____

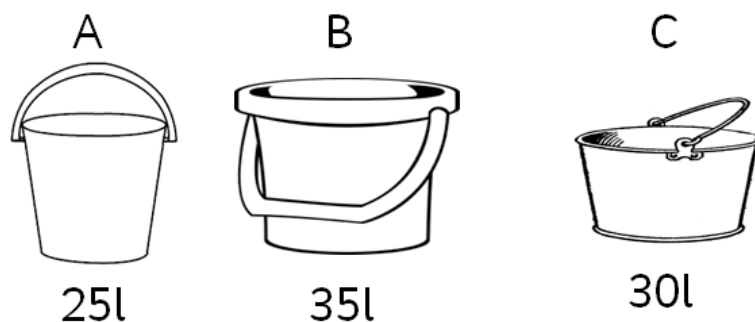
Guided Learning Task 1 (order the volumes from greatest to least)

1.



greatest volume can _____ can _____ can _____ least volume

2.



greatest volume bucket _____ bucket _____ bucket _____ least volume

Guided Learning Task 2 (order the volumes from greatest to the least)

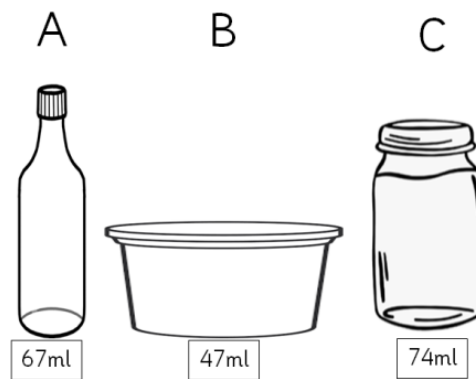
1.



greatest volume can _____ can _____ can _____ can _____ least volume

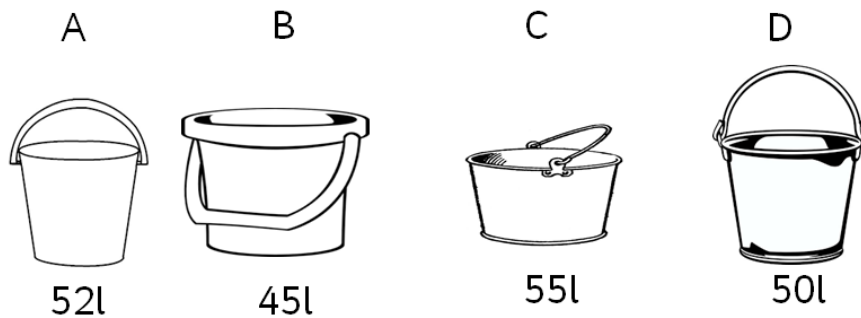
Independent (put the volumes in order from greatest to least)

1.



greatest volume _____ least volume

2.



greatest volume _____ least volume

3. Put these volumes in order starting with the greatest.

36 ml 29 ml 13 ml 78 ml

--	--	--	--

4. 78 litres 79 litres 59 litres 52 litres

--	--	--	--

5. 62 ml 2 litres 24 litres 99 ml

--	--	--	--

6. 34 litres 88 ml 88 litres 34 ml

--	--	--	--