

Unit 12: Lesson 2

Name _____




Guided Learning Task 1 (order the three masses heaviest to lightest)

1.

A 	B 	C 
45 g	54 g	39 g

Heaviest box _____ box _____ box _____ Lightest




2.

A 	B 	C 
36 kg	40 kg	29 kg

Heaviest child _____ child _____ child _____ Lightest




Guided Learning Task 2 (order the three masses heaviest to lightest)

1.

A 	B 	C 
43 kg	44 kg	39 kg

Heaviest child _____ child _____ child _____ Lightest

2.

A 	B 	C 
63 g	36 g	68 g

Heaviest toy _____ toy _____ toy _____ Lightest

Independent (rewrite the masses in order from heaviest to lightest)

1. 29 g; 37 g; 56 g _____

2. 38 kg; 72 kg; 81 kg _____

3. 56 g; 65 g; 59 g _____

4. 23 kg; 19kg; 32 kg _____

Kim has ordered three masses from heaviest to lightest.

Some of them have been hidden. What could their masses be?

1.

36 g

29 g

g

2.

78 g

g

69 g

3.

g

36 g

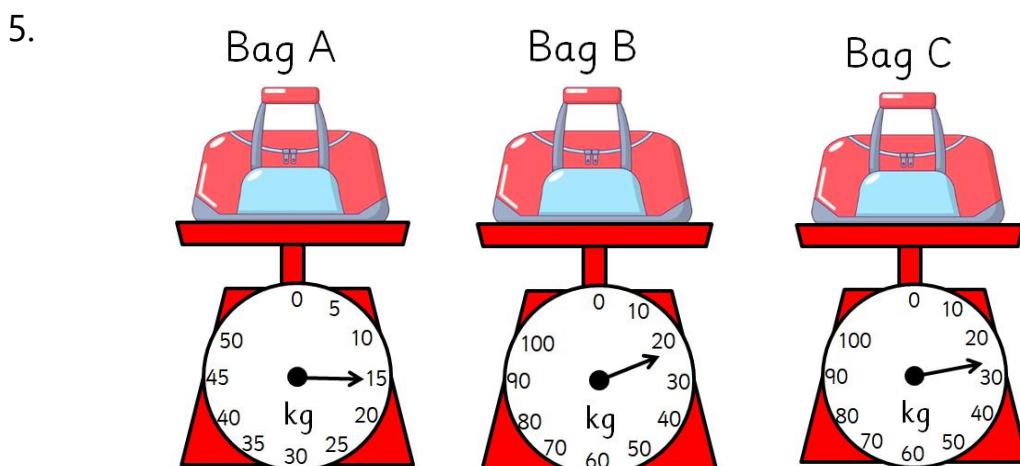
32 g

4.

g

56 g

g



Write the masses of the bags in order from heaviest to lightest.

Bag _____ Bag _____ Bag _____